

## EXERCISE 12

1. Circle the greater number in each set.

(a) 4.602, 4.7

(b) 9.1, 9.05

(c) 1.924, 1.828

(d) 5, 0.52

2. Circle the greatest number in each set.

(a) 24.68, 264.8, 64.82, 624.8

(b) 5.073, 5.73, 5.307, 5.037

(c) 0.042, 0.109, 1.1, 0.91

3. Write  $>$  (is greater than),  $<$  (is less than) or  $=$  (is equal to) in each .

(a) 8.26  8.206

(b) 7.001  7.1

(c) 10.81  10.810

(d) 9.345  9.306

(e) 6.34  6.304

(f) 6.002  6.200

4. Arrange the set of numbers in increasing order.

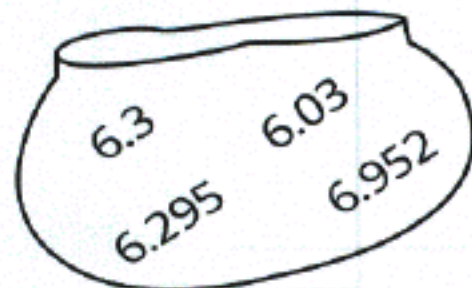
2.8

2.128

2.18

2.218

5. Arrange the set of numbers in decreasing order.



# EXERCISE 24

1. Subtract.

$\begin{array}{r} 4.91 \\ - 2.56 \\ \hline \end{array}$	$\begin{array}{r} 8 \\ - 4.92 \\ \hline \end{array}$	$\begin{array}{r} 0.9 \\ - 0.47 \\ \hline \end{array}$	$\begin{array}{r} 12.05 \\ - 7.4 \\ \hline \end{array}$
T	E	H	U
$\begin{array}{r} 9.4 \\ - 4.73 \\ \hline \end{array}$	$\begin{array}{r} 1.38 \\ - 0.6 \\ \hline \end{array}$	$\begin{array}{r} 16.42 \\ - 9.18 \\ \hline \end{array}$	$\begin{array}{r} 3 \\ - 1.63 \\ \hline \end{array}$
R	P	C	S
$\begin{array}{r} 11.76 \\ - 4.38 \\ \hline \end{array}$	$\begin{array}{r} 10.06 \\ - 5.9 \\ \hline \end{array}$	$\begin{array}{r} 15 \\ - 6.04 \\ \hline \end{array}$	$\begin{array}{r} 10.6 \\ - 3.82 \\ \hline \end{array}$
I	G	O	N

**What birds cannot fly?**

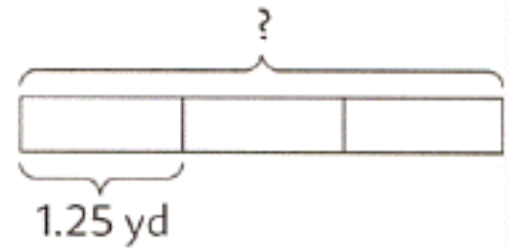
Write the letters which match the answers.  
You will find two of them.

0.78	3.08	6.78	4.16	4.65	7.38	6.78

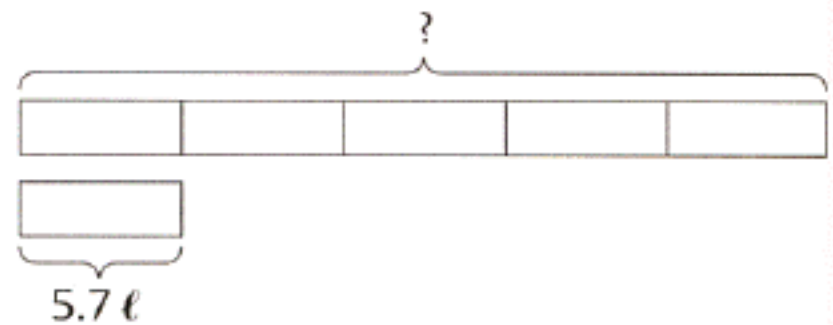
8.96	1.37	2.35	4.67	7.38	7.24	0.43

## EXERCISE 32

1. Lynn bought 3 pieces of ribbon each 1.25 yd long.  
Find the total length of the ribbon.



- 
2. A bucket can hold 5.7 liters of water.  
A fish tank can hold 5 times as much water as the bucket.  
Find the capacity of the fish tank.



- 
3. Cameron saved \$2.50 a week for 6 weeks.  
How much did he save altogether?

